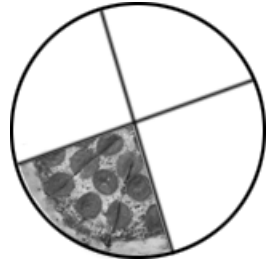



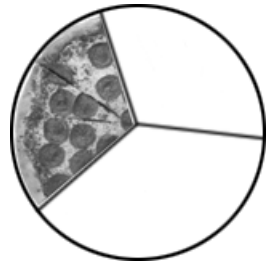
Name _____



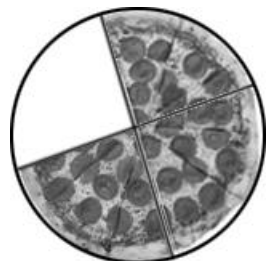
$\frac{3}{4}$



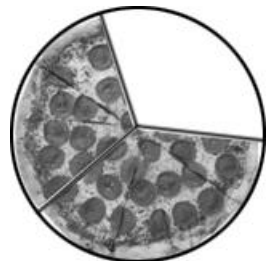
$\frac{1}{4}$



$\frac{2}{3}$



$\frac{1}{2}$



$\frac{1}{3}$