


Counts the dots on each die and write the number below each picture.
Then determine the total number of dots on both dice and write the total number on the right.


Name _____




$$1 + 2 = 3$$



$$3 + 1 = \underline{\quad}$$



$$2 + 4 = \underline{\quad}$$



$$5 + 3 = \underline{\quad}$$